



Final exam: Chemistry

NAME

SURNAME

EXAM (60%)

--	--	--	--	--	--	--	--	--	--

Important: Please, write down your name. Read the exam carefully before you start. Write down the answers in the blank spaces provided right after each exercise. You may use the last page for drafts. Time available for the test is 2:30 h.

1. **(1 point, 10 min)** Given the following molecules: PF₅; XeF₄; CH₂Cl₂; CH₂CCl₂; CCl₄ fill in the information missing in the table shown below (hybridization of the central atom, shape of the molecule, bond angles and polarity of the molecule).

Molecule	Hybridization	Shape	Bond angles	Polarity
PF ₅				
XeF ₄				
CH ₂ Cl ₂				
CH ₂ =CCl ₂				
CCl ₄				

2. **(0.75 points, 5 mins)** Suppose that three unknown pure substances are liquids at room temperature. You make vapour pressure measurements and find that substance **Q** has a pressure of 110 Torr, substance **R** has a pressure of 42 Torr, and substance **S** has a pressure of 330 Torr. If you slowly increase the temperature, which substance will boil first and which will boil last? Provide a brief explanation to your answer.

Cartagena99

CLASES PARTICULARES, TUTORÍAS TÉCNICAS ONLINE
LLAMA O ENVÍA WHATSAPP: 689 45 44 70

ONLINE PRIVATE LESSONS FOR SCIENCE STUDENTS
CALL OR WHATSAPP:689 45 44 70

3. (0.75 points, 15 mins). The decomposition of a given compound (A) has a half-lifetime of 32 minutes for an initial concentration of 0.05M. The half-lifetime is 46 minutes when the initial concentration is 0.035 M. Predict the order of the reaction and the value of the kinetic constant.

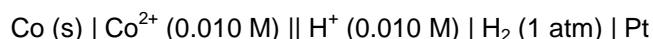
4. (1.5 points, 10 min) Given an aqueous solution made of in aqueous ammonia (NH_3) and ammonium chloride (NH_4Cl) with a concentration $3 \cdot 10^{-3}$ M in NH_3 and 1M in NH_4Cl . If MgCl_2 is added until a concentration $2 \cdot 10^{-3}$ M of MgCl_2 is reached, explain if magnesium hydroxide will precipitate.
Data: $K_s(\text{Mg}(\text{OH})_2) = 1.2 \cdot 10^{-11}$; $K_b(\text{NH}_3) = 1.8 \cdot 10^{-5}$.

The logo for Cartagena99 features the word "Cartagena99" in a stylized, blue, serif font. The "99" is significantly larger and more prominent than the rest of the text. The logo is set against a light blue background with a white arrow pointing to the right, and a white shadow effect is visible beneath the text.

CLASES PARTICULARES, TUTORÍAS TÉCNICAS ONLINE
LLAMA O ENVÍA WHATSAPP: 689 45 44 70

ONLINE PRIVATE LESSONS FOR SCIENCE STUDENTS
CALL OR WHATSAPP:689 45 44 70

5. (10 min, 1 point) Given the following electrochemical cell:



- a) Write down the half reactions that take place in the anode and the cathode, label each of the electrodes and indicate the oxidizing and reducing agent in each case.
- b) Which of the following changes will produce an increase in the cell potential?
 - i. An increase in the volume of the CoCl_2 solution from 100 mL to 300 mL by adding water to the solution.
 - ii. An increase in the concentration of $[\text{H}^+]$ from 0.010 M to 0.500 M.
 - iii. An increase in the mass of the electrode from 15 g to 25 g.
 - iv. An increase in the concentration of $[\text{Co}^{2+}]$ from 0.010 M to 0.500 M.

6. (1 points, 15 min) You want to heat the air in your house with natural gas (CH_4). Assume your house has 275m^2 of floor area and that the ceilings are 2.50m from the floors. The air in the house has a molar heat capacity of $29.1 \text{ J}\cdot\text{mol}^{-1}\cdot\text{K}^{-1}$. Assuming that 60 % of the heat of combustion is useful, how many liters of methane (S.T.P.) must be burned to heat the air from $15.0 \text{ }^\circ\text{C}$ to $22 \text{ }^\circ\text{C}$? (Assume c_v to be constant in that temperature range).

Data: $\Delta H_f^\circ (\text{CH}_4) = -74.9 \text{ kJ/mol}$; $\Delta H_f^\circ (\text{H}_2\text{O}, \text{l}) = -285.8 \text{ kJ/mol}$; $\Delta H_f^\circ (\text{CO}_2) = -393.509 \text{ kJ/mol}$
Average molar mass of air $M_{\text{air}} = 28.9 \text{ g/mol}$; Density of air = 1.22 g/L . $M_{(\text{CH}_4)} = 16 \text{ g/mol}$;
 $R = 0.082 \text{ atm}\cdot\text{l}\cdot\text{mol}^{-1}\cdot\text{K}^{-1} = 8.314 \text{ J}\cdot\text{mol}^{-1}\cdot\text{K}^{-1}$

The logo for Cartagena99 features the word "Cartagena99" in a stylized, blue, serif font. The "99" is significantly larger and more prominent than the rest of the text. The logo is set against a light blue background with a white arrow pointing to the right, and a yellow and orange gradient bar at the bottom.

CLASES PARTICULARES, TUTORÍAS TÉCNICAS ONLINE
LLAMA O ENVÍA WHATSAPP: 689 45 44 70

ONLINE PRIVATE LESSONS FOR SCIENCE STUDENTS
CALL OR WHATSAPP:689 45 44 70

7. (1.0 marks, 15 mins) Indicate whether the following statements are true (T) or false (F).

Correct answers +0.1p; Incorrect answers -0.05p.

1	The hydrohalogenation reaction is an addition reaction that usually yields as a product an alcohol.
2	The solubility in water of carboxylic acids of the same homologous series decreases with the number of carbon atoms of the chain.
3	The reaction of a CARBOXYLIC ACID with an AMINE usually yields an ester as a result of a condensation reaction.
4	Pyrogenation of coal is based on a thermal treatment with oxygen at high temperature to obtain liquid hydrocarbons.
5	From methane it is possible to obtain syngas ($\text{CO} + \text{H}_2$) which is used as raw material for many industrial processes.
6	In the combustion of a fuel, a <i>rich mixture</i> is a mixture with an excess of air.
7	Linear alkenes usually have higher boiling points than linear alcohols of the same number of carbon

CLASES PARTICULARES, TUTORÍAS TÉCNICAS ONLINE
LLAMA O ENVÍA WHATSAPP: 689 45 44 70

ONLINE PRIVATE LESSONS FOR SCIENCE STUDENTS
CALL OR WHATSAPP:689 45 44 70

Cartagena99

8. (1 points, 10 min). A mixture containing 45% benzene (B) and 55% toluene (T) by mass is fed to a distillation column. An overhead stream of 95 wt% B is produced, and 8% of the benzene fed to the column leaves in the bottom stream. The feed rate is 2000 kg/h.
- Draw the flowchart
 - Determine the overhead flow rate
 - Determine the mass flow rates of benzene and toluene in the bottom stream.

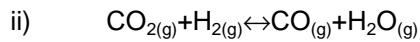
The logo for Cartagena99 features the text 'Cartagena99' in a stylized, blue, serif font. The text is set against a light blue, abstract background that resembles a map of the city of Cartagena. Below the text is a horizontal orange bar with a slight gradient.

CLASES PARTICULARES, TUTORÍAS TÉCNICAS ONLINE
LLAMA O ENVÍA WHATSAPP: 689 45 44 70

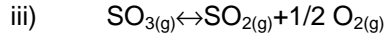
ONLINE PRIVATE LESSONS FOR SCIENCE STUDENTS
CALL OR WHATSAPP:689 45 44 70

9. (2 points, 30 min). Using the information given below:


- a) Calculate the value of ΔH° and ΔS° . Assume them to be independent of the temperature in either cases i) and ii).
 b) Determine the temperature for which both reactions will have the same ΔG° and calculate the value of ΔG° at that temperature.



$\ln K_{\text{CO}_2}$	-0.39144	0.43749	0.87498	1.70391
$1/T \text{ (K}^{-1}\text{)}$	$8.3 \cdot 10^{-4}$	$1 \cdot 10^{-3}$	$1.11 \cdot 10^{-3}$	$1.28 \cdot 10^{-3}$



$\ln K_{\text{SO}_3}$	1.22037	0.48354	-0.8059	-1.9572
$1/T \text{ (K}^{-1}\text{)}$	$8.3 \cdot 10^{-4}$	$9 \cdot 10^{-4}$	$1 \cdot 10^{-3}$	$1.12 \cdot 10^{-3}$



CLASES PARTICULARES, TUTORÍAS TÉCNICAS ONLINE
 LLAMA O ENVÍA WHATSAPP: 689 45 44 70

ONLINE PRIVATE LESSONS FOR SCIENCE STUDENTS
 CALL OR WHATSAPP: 689 45 44 70

Cartagena99